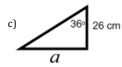
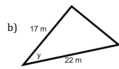
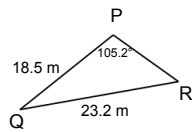


Example 2: While walking to school you pass a barn with a silo. Looking up to the top of the silo you estimate the angle of elevation to the top of the silo to be about 14° . You continue walking and find that you were around 40 m from the silo. Using this information and your knowledge of trigonometric ratios calculate the height of the silo.

Ex 1: Find the indicated quantities.



Example 3: Find angle R.



Example 4: Find a.

